


1.



Write as many sentences as you can to compare the lengths of the sheep and chickens.

.....

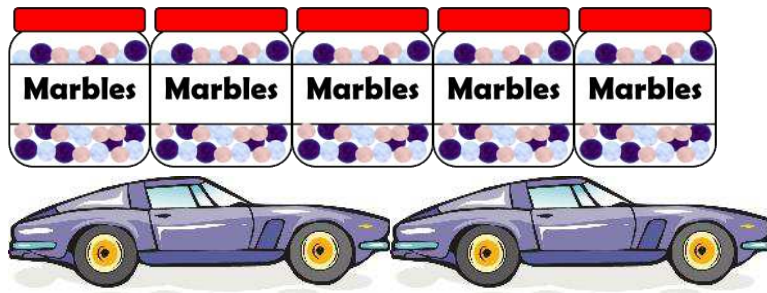
.....

.....

.....

.....

2.



Write as many sentences as you can to compare the lengths of the jars of marbles and the toy cars.

.....


.....

.....

.....

.....

1.



Write as many sentences as you can to compare the lengths of the toy aeroplanes and the keys.

.....

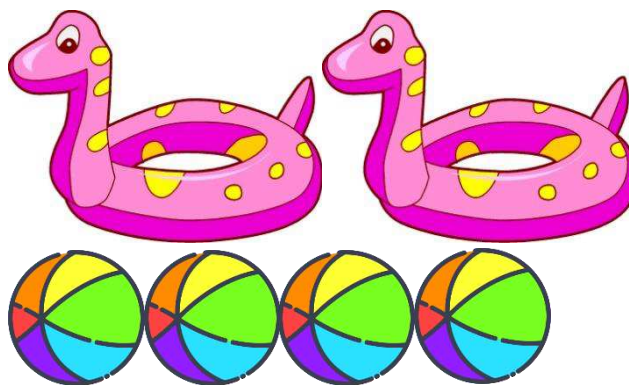
.....

.....

.....

.....

2.



Write as many sentences as you can to compare the lengths of the dinosaur beach toys and the balls.

.....

.....

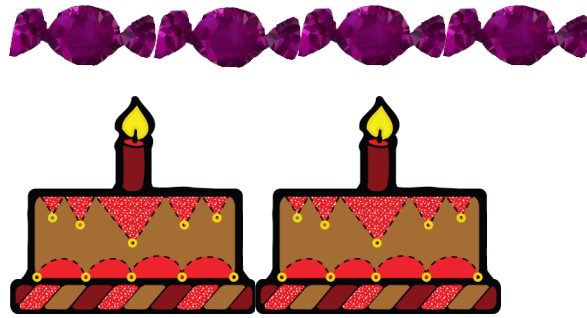
.....

.....

.....

Name:

1.



Write as many sentences as you can to compare the lengths of the sweets and cakes.

.....


.....

.....

.....

.....

2.



Write as many sentences as you can to compare the lengths of the tractors and the pigs.

.....

.....

.....

.....

.....

Name:



Answers:

Page 1

1. 7 chickens are the same length as 2 sheep.

1 sheep is shorter than 4 chickens, etc.

2. 3 jars of marbles are longer than 1 car.

2 cars are longer than 5 jars of marbles, etc.

Page 2

1. 2 toy aeroplanes are longer than 3 keys.

1 key is shorter than 1 aeroplane, etc.

2. 3 balls are shorter than 2 dinosaur beach toys.

1 dinosaur beach toy is longer than 2 balls etc.

Page 3

1. 4 sweets are longer than 2 cakes.

1 cake is longer than 1 sweet, etc.

2. 1 tractor is longer than 2 pigs.

4 pigs are shorter than 2 tractors, etc.